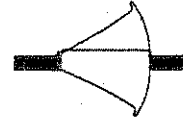
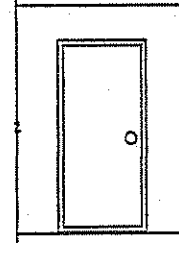

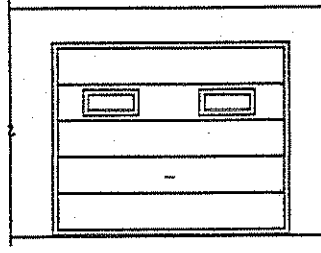
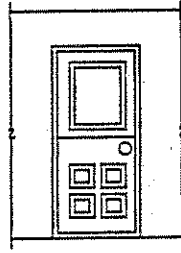
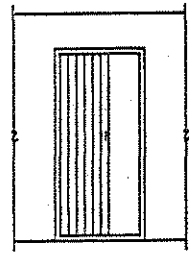
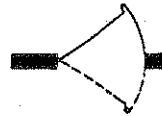
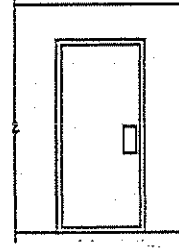
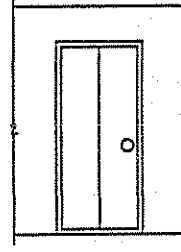
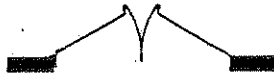
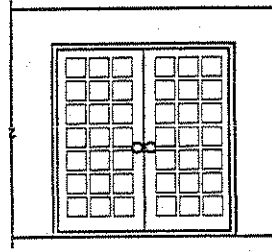
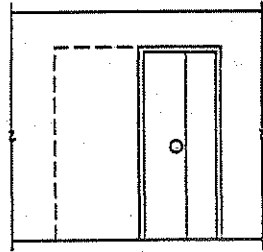
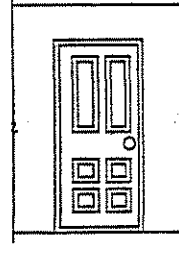
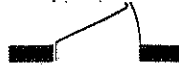
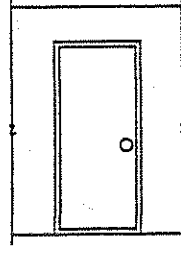

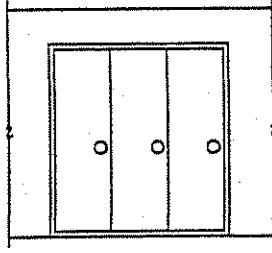
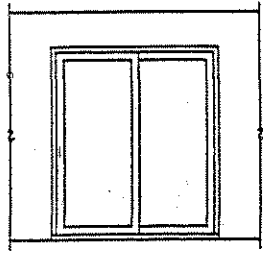


# Door Symbols

Activity 16-6

# Solution



# Window Types

## Activity 16-1

Name \_\_\_\_\_




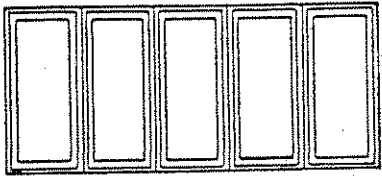
Date \_\_\_\_\_

Using the following terms, identify each of the basic window types illustrated below.

awning  
bay  
bow  
casement



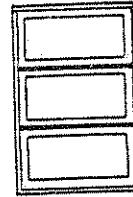
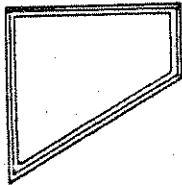
combination  
double-hung  
hopper

horizontal sliding  
picture  
trapezoid





1. \_\_\_\_\_

2. \_\_\_\_\_



3. \_\_\_\_\_


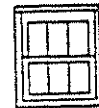


4. \_\_\_\_\_



5. \_\_\_\_\_

6. \_\_\_\_\_

7. \_\_\_\_\_



8. \_\_\_\_\_

9. \_\_\_\_\_

10. \_\_\_\_\_

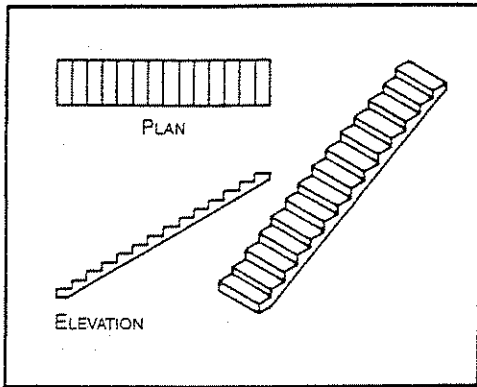
# Stair Designs

## Activity 17-1

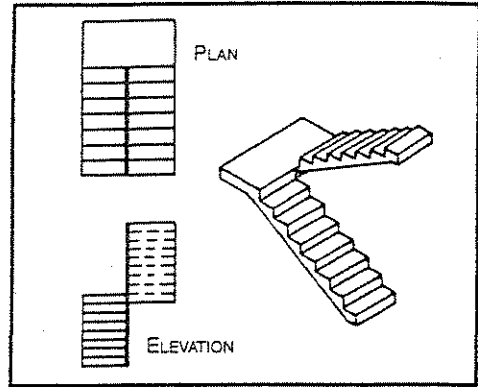
Name \_\_\_\_\_

Date \_\_\_\_\_

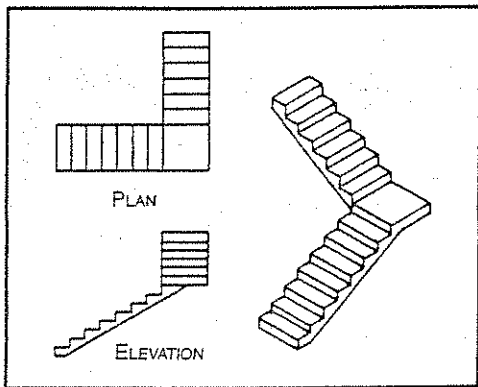
Identify each type of stairway illustrated below. Write their names on the lines provided.



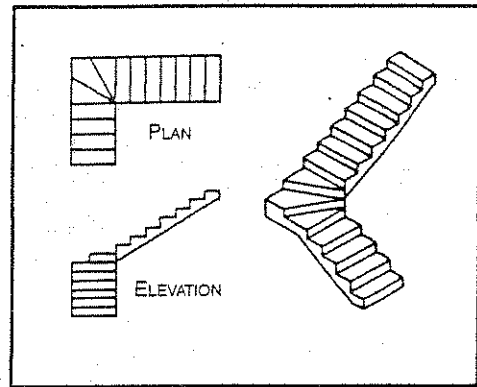
1. \_\_\_\_\_



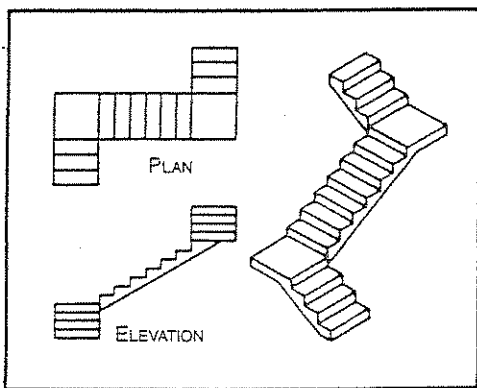
2. \_\_\_\_\_



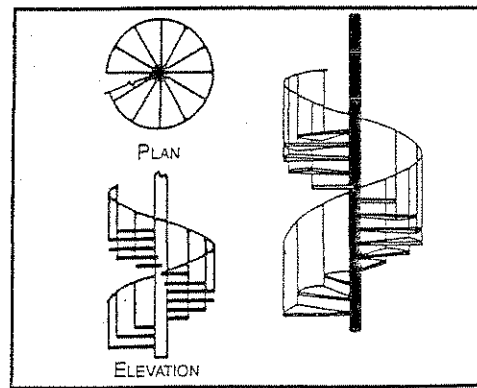
3. \_\_\_\_\_



4. \_\_\_\_\_



5. \_\_\_\_\_



6. \_\_\_\_\_

# Common Architectural Symbols

## Structural

Double Hung Window	
Double Casement Window	
Interior Door	
Exterior Door	
Sliding Door	
Folding Doors	
Concrete	
Brick	
Concrete Block	
Wood	
Fireplace	

## Appliances & Fixtures

Sink	
Range	
Built-in Oven	
Refrigerator	
Dishwasher	
Washer	
Dryer	
Floor Cabinets	
Wall Cabinets	
Lavatory	
Countertop Lavatory	
Toilet	
Tub	
Shower	

## Electrical

Switch	
Three-Way Switch	
Two Switches	
115-Volt Duplex Receptacle	
220-Volt Duplex Receptacle	
Ground Fault Circuit Interrupter	
Television Outlet	
Telephone Jack	
Ceiling Light	
Lighting Outlet-Wall	
Lighting Outlet-Recessed	